

GEOMETRY & SHAPES


LABORATORY • L8

Shape Composition • Explore

Objective: *Name shapes by their sides and corners.*

DO THIS Name each shape. Count its sides.

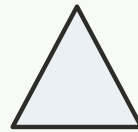
DISCOVER Shapes have sides and corners.



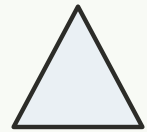
circle



rectangle




triangle



diamond

COUNT THE SIDES Write how many sides.

1



sides:

2



sides:

3



sides:

4



sides:

I named shapes by: sides corners how they look

TEACHER EDITION

GEOMETRY & SHAPES


LABORATORY • L8

Shape Composition • Explore

Objective: *Name shapes by their sides and corners.*

DO THIS Name each shape. Count its sides.

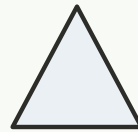
DISCOVER Shapes have sides and corners.



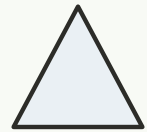
circle



rectangle

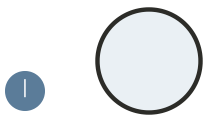


triangle



diamond

COUNT THE SIDES Write how many sides.



sides: 0



sides: 4



sides: 3



sides: 4

TEACHER NOTES Answer key & guidance

Answers: see page
Common error: Counting objects more than once or skipping objects.

Strategy: Introduce with the manipulatives named below.
Prompt: "Show me how you know."

I named shapes by: sides corners how they look

