

KINDERGARTEN MASTERY

ASSESSMENT 2 OF 8 • QUARTER 4


Quarter 4 • Numerals & Ordering


Objective: *Show what you can do on your own.*


DO THIS Work on your own. Do your best thinking.

COUNT AND WRITE Write the number for each group.

1  →


2  →


3  →


4  →

CIRCLE THE NUMBER Circle the matching number.

1  4 8 16

2  8 12 17

3  4 8 17

4  5 12 15

TEACHER EDITION

KINDERGARTEN MASTERY

ASSESSMENT 2 OF 8 • QUARTER 4

Quarter 4 • Numerals & Ordering


Objective: *Show what you can do on your own.*


DO THIS Work on your own. Do your best thinking.

COUNT AND WRITE Write the number for each group.

1  → 2

2  → 1

3  → 3

4  → 17

CIRCLE THE NUMBER Circle the matching number.

1  4 8 16

2  8 12 17

3  4 8 17

4  5 12 15

TEACHER NOTES Answer key & guidance

Answers: see page
Common error: Treating the picture and the symbol as unrelated.

Strategy: Link the model to the numeral or equation aloud.
Prompt: "Show me how you know."