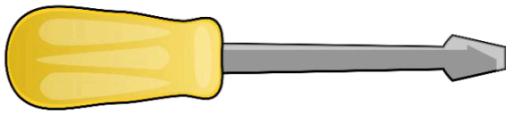


### Comparing lengths using inches


Measure the following objects and circle the longer object.



Length: \_\_\_\_\_ inches



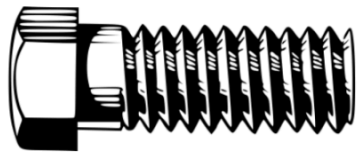
Length: \_\_\_\_\_ inches




Length: \_\_\_\_\_ inches



Length: \_\_\_\_\_ inches



Length: \_\_\_\_\_ inches



Length: \_\_\_\_\_ inches