

NUMERALS & QUANTITY

QUARTER 1 • WEEK 6

Numerals 4 and 5 • Apply

Objective: *Use numerals with real groups.*

DO THIS Count each group. Circle the right numeral.

MATCH THE NUMERAL Circle the matching numeral.


1  2 3 4

2  0 1 3


3  0 4 5

4  1 3 4

COUNT AND WRITE Write the number.

1  →

2  →

3  →

4  →

I can: read it trace it write it

TEACHER EDITION

NUMERALS & QUANTITY

QUARTER 1 • WEEK 6

Numerals 4 and 5 • Apply


Objective: *Use numerals with real groups.*

DO THIS Count each group. Circle the right numeral.

MATCH THE NUMERAL Circle the matching numeral.

1  2 3 **4**

2  0 1 **3**

3  0 4 5

4  **1** 3 4

COUNT AND WRITE Write the number.

1  → **1**

2  → **3**

3  → **1**

4  → **1**

TEACHER NOTES Answer key & guidance

Answers: see page

Strategy: Read each situation aloud; let the child interpret first.

Common error: Choosing an operation before understanding the situation.

Prompt: "Show me how you know."

I can: read it trace it write it

