

MEASUREMENT & TIME

QUARTER 4 • WEEK 32

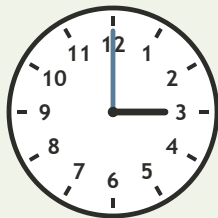
Time and Sequence • Connect

Objective: *Read time to the hour.*

DO THIS Look at the hour hand. Write the time.

DISCOVER The short hand shows the hour.


EXAMPLE



3 : 00


READ THE CLOCK Write the time to the hour.

1




_____ : 00

2




_____ : 00

3



_____ : 00

4



_____ : 00

I compared: length time value

TEACHER EDITION

MEASUREMENT & TIME

QUARTER 4 • WEEK 32


Time and Sequence • Connect

Objective: *Read time to the hour.*

DO THIS Look at the hour hand. Write the time.

DISCOVER The short hand shows the hour.


EXAMPLE



3 : 00


READ THE CLOCK Write the time to the hour.

1




1:00

2




5:00

3



11:00

4



6:00

TEACHER NOTES Answer key & guidance

Answers: see page
Common error: Treating the picture and the symbol as unrelated.

Strategy: Link the model to the numeral or equation aloud.
Prompt: "Show me how you know."

I compared: length time value