

DATA & GRAPHS

QUARTER 4 • WEEK 34

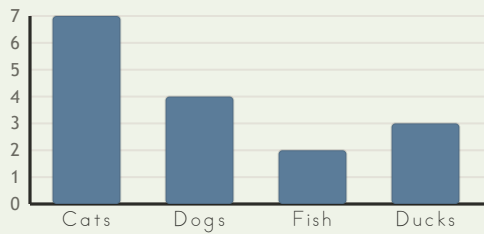
Data and Graphing • Connect

Objective: *Sort and graph, then read the graph.*

DO THIS Count each group. Compare the columns.

DISCOVER A graph shows how many in each group.

EXAMPLE



Most: Cats
Fewest: Fish

PICTURE GRAPH Each circle is one.

Cats ● ● ● ● ● ● ●

Dogs ● ● ● ●

Fish ● ●

Ducks ● ● ●

To compare I used: the columns counting the key

TEACHER EDITION

DATA & GRAPHS

QUARTER 4 • WEEK 34

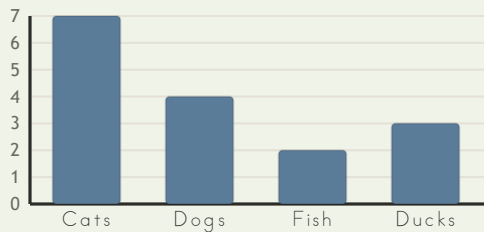
Data and Graphing • Connect

Objective: *Sort and graph, then read the graph.*

DO THIS Count each group. Compare the columns.


DISCOVER A graph shows how many in each group.

EXAMPLE



Most: Cats
Fewest: Fish

PICTURE GRAPH Each circle is one.



TEACHER NOTES Answer key & guidance

Answers: see page
Common error: Treating the picture and the symbol as unrelated.

Strategy: Link the model to the numeral or equation aloud.
Prompt: "Show me how you know."

To compare I used: the columns counting the key

