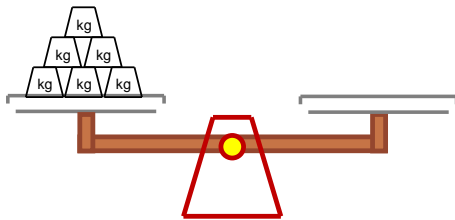


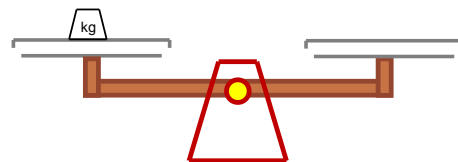
Measure weights in kilograms

Grade 2 Measurement Worksheet

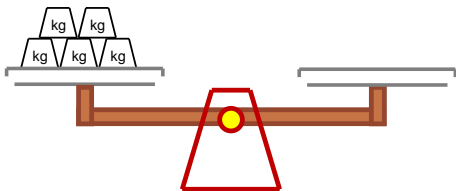
$1 \text{ kg} = 1 \text{ kilogram}$



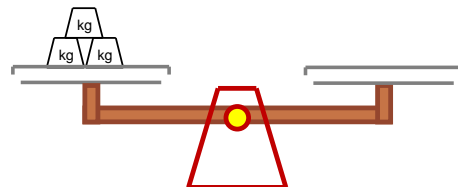
The baby weighs ____ kg.



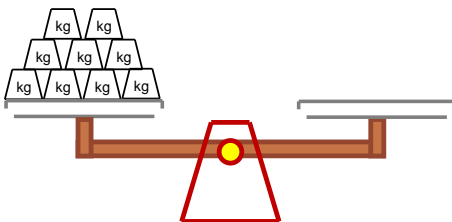
The pair of shoes weighs ____ kg.



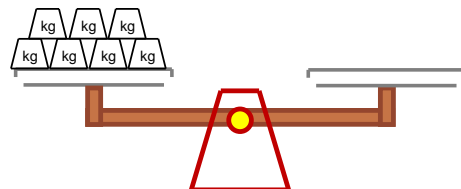
The pumpkin weighs ____ kg.



The ice bucket weighs ____ kg.



The box weighs ____ kg.



The water bottle weighs ____ kg.

How much heavier is the water bottle than the baby? _____

How much heavier is the box than the pumpkin? _____